


This task is to help me know what you know and how I can help you. Don't worry. Try your best.

Name _____

Materials:

- Counting manipulatives such as counting bears, unifix cube
- Paper and Pencil if the student chooses


Farmer Brown has 12 cows on his farm. He has 2 pens to hold the cows. What are all the ways Farmer Brown can fit his cows into the 2 pens?

A large empty rectangular box with a black border, intended for the student to write their answer to the problem.

This task is to help me know what you know and how I can help you. Don't worry. Try your best.

Name _____

Teacher Directions: Hand out the following picture to students and ask how many dinosaurs there are. Once you have confirmed that there are 35 dinosaurs write the number 35 on the board. Underline the digit 3 and say, "Use a red pencil and put a circle around what this part of the number means in the set of dinosaurs." Next underline the 5 and say, "Use a blue pencil and put a circle around what this part of the number means in the set of dinosaurs."



Teacher Directions: Say "compare 21 and 12 using $>$, $<$, or $=$. Explain how you know."

This task is to help me know what you know and how I can help you. Don't worry. Try your best.


Name _____

Lamar and Siri had some base-ten blocks.

Lamar said, "I can make 124 using 1 hundred, 2 tens, and 4 ones."

Siri said, "I can make 124 using 124 ones."

1. Can you find a way to make 124 using only tens and ones? Can you find a different way?



2. Find as many ways as you can to make 124 using any combination of hundreds, tens, and ones. Explain how you know you have found all of the ways.

